

# Templates for Subtraction

Form a Subtraction Statement

5      7      2

$$\square - \square = \square$$

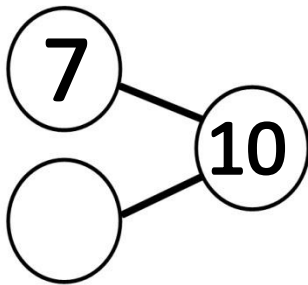
© www.basic-math-explained.com

Form a Subtraction Statement

$$\boxed{6} - \boxed{4} = \square$$

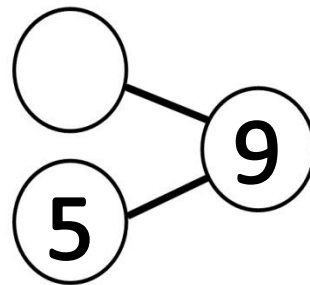
© www.basic-math-explained.com

Fill in the blanks with the correct number.



© www.basic-math-explained.com

Fill in the blanks with the correct number.



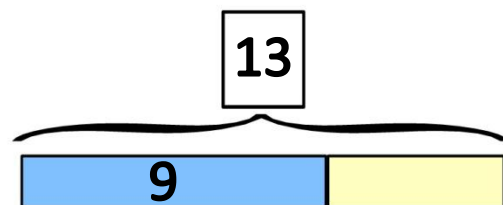
© www.basic-math-explained.com

Draw Models



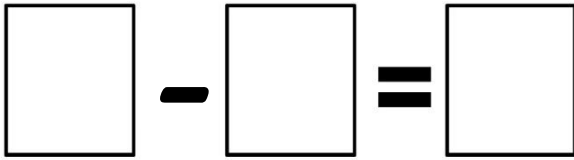
© www.basic-math-explained.com

Draw Models



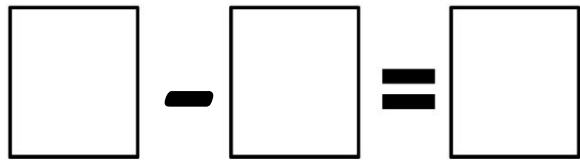
© www.basic-math-explained.com

### Form a Subtraction Statement



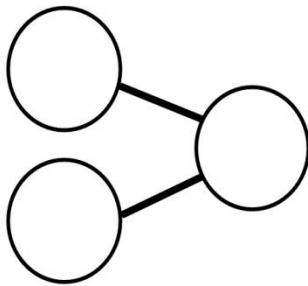
© www.basic-math-explained.com

### Form a Subtraction Statement



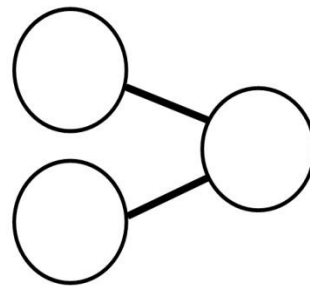
© www.basic-math-explained.com

Fill in the blanks with the correct number.



© www.basic-math-explained.com

Fill in the blanks with the correct number.



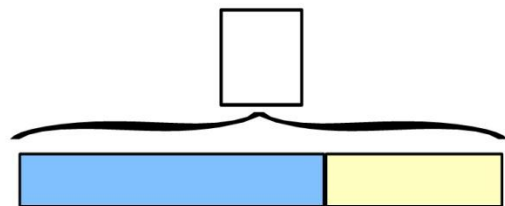
© www.basic-math-explained.com

### Draw Models



© www.basic-math-explained.com

### Draw Models



© www.basic-math-explained.com