

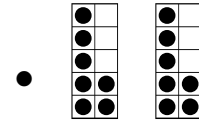
Name _____

Date _____

Match the following:

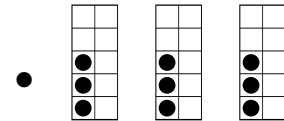
2×1 •

• $7 + 7$ •



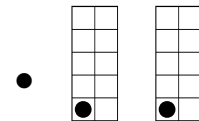
3×10 •

• $1 + 1$ •



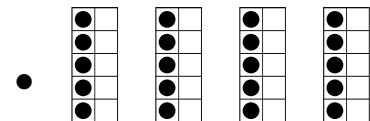
2×7 •

• $5 + 5 + 5 + 5$ •



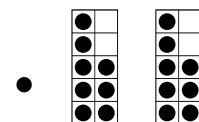
3×3 •

• $10 + 10 + 10$ •



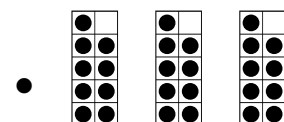
4×5 •

• $3 + 3 + 3$ •



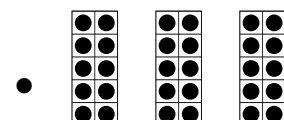
4×2 •

• $8 + 8$ •



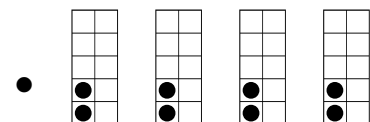
2×8 •

• $2 + 2 + 2 + 2$ •

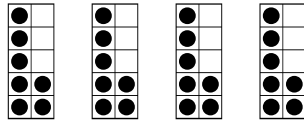


3×9 •

• $9 + 9 + 9$ •

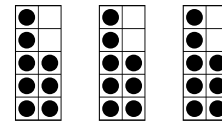


1. Fill in the blanks with suitable numbers to represent the diagram.



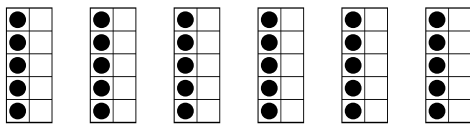
$$\underline{\quad} \times \underline{\quad} = \underline{\quad}$$

2. Fill in the blanks with suitable numbers to represent the diagram.



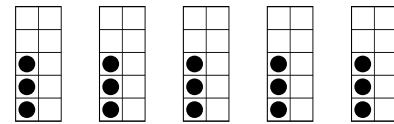
$$\underline{\quad} \times \underline{\quad} = \underline{\quad}$$

3. Fill in the blanks with suitable numbers to represent the diagram.



$$\underline{\quad} \times \underline{\quad} = \underline{\quad}$$

4. Fill in the blanks with suitable numbers to represent the diagram.



$$\underline{\quad} \times \underline{\quad} = \underline{\quad}$$

5. Fill in the blanks with suitable numbers to represent the diagram.

$$\boxed{1} + \boxed{1} + \boxed{1} + \boxed{1}$$

$$\underline{\quad} \times \underline{\quad} = \underline{\quad}$$

6. Fill in the blanks with suitable numbers to represent the diagram.

$$\boxed{7} + \boxed{7} + \boxed{7}$$

$$\underline{\quad} \times \underline{\quad} = \underline{\quad}$$

7. Fill in the blanks with suitable numbers to represent the diagram.

$$\boxed{2} + \boxed{2} + \boxed{2}$$

$$\underline{\quad} \times \underline{\quad} = \underline{\quad}$$


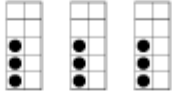
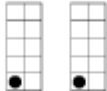

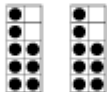


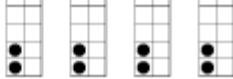
8. Fill in the blanks with suitable numbers to represent the diagram.

$$\boxed{9} + \boxed{9} + \boxed{9}$$

$$\underline{\quad} \times \underline{\quad} = \underline{\quad}$$

ANSWERS

Match the following:

| | | |
|---------------|-----------------|---|
| 2×1 | $7 + 7$ |  |
| 3×10 | $1 + 1$ |  |
| 2×7 | $5 + 5 + 5 + 5$ |  |
| 3×3 | $10 + 10 + 10$ |  |
| 4×5 | $3 + 3 + 3$ |  |
| 4×2 | $8 + 8$ |  |
| 2×8 | $2 + 2 + 2 + 2$ |  |
| 3×9 | $9 + 9 + 9$ |  |

1. $4 \times 7 = 28$

2. $3 \times 8 = 24$

3. $6 \times 5 = 30$

4. $5 \times 3 = 15$

5. $4 \times 1 = 4$

6. $3 \times 7 = 21$

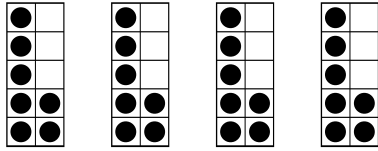
7. $3 \times 2 = 6$

8. $3 \times 9 = 27$

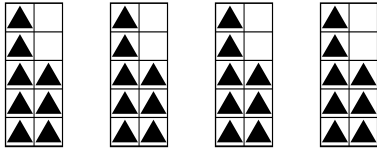
Name: _____

Date: _____

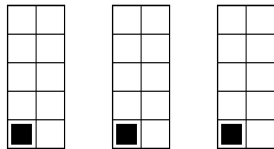
Fill in the Blanks



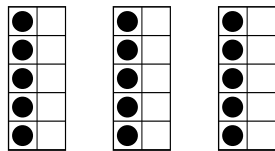
= _____ groups of _____ = _____



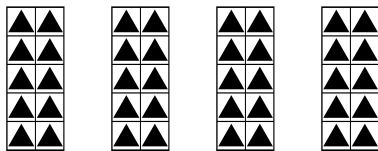
= _____ groups of _____ = _____



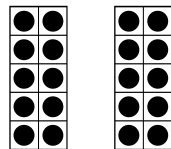
= _____ groups of _____ = _____



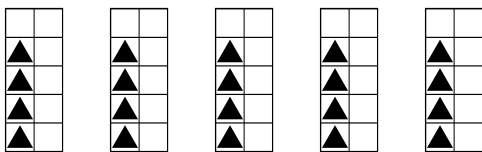
= _____ groups of _____ = _____



= _____ groups of _____ = _____



= _____ groups of _____ = _____



= _____ groups of _____ = _____

Match the following

4×6 • •  = _____

4×5 • •  = _____

4×2 • •  = _____

4×1 • •  = _____

4×0 • •  = _____

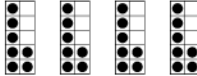
4×3 • •  = _____

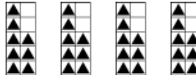
4×4 • •  = _____

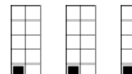
4×7 • •  = _____

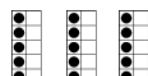
ANSWERS


Fill in the Blanks


 = 4 groups of 7 = 28

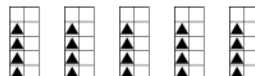
 = 4 groups of 8 = 32

 = 3 groups of 1 = 3



 = 3 groups of 5 = 15


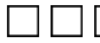
 = 4 groups of 10 = 40



 = 2 groups of 10 = 20



 = 5 groups of 4 = 20



Match the following



4×6   = 8


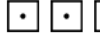
4×5   = 0



4×2   = 24

4×1   = 28

4×0   = 20

4×3   = 12

4×4   = 4

4×7   = 16

More Worksheets:

<https://www.teacherspayteachers.com/Product/Multiplication-Homework-Worksheets-3692634>