

Templates for Addition

Form an Addition Statement

3 9 6

$$\square + \square = \square$$

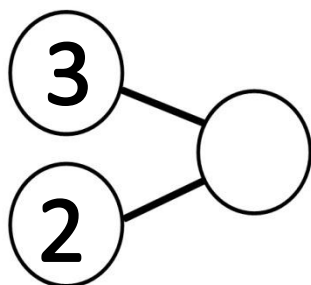
© www.basic-math-explained.com

Form an Addition Statement

$$4 + 4 = \square$$

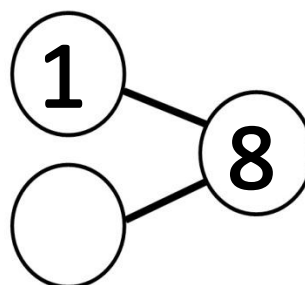
© www.basic-math-explained.com

Fill in the blanks with the correct number.



© www.basic-math-explained.com

Fill in the blanks with the correct number.



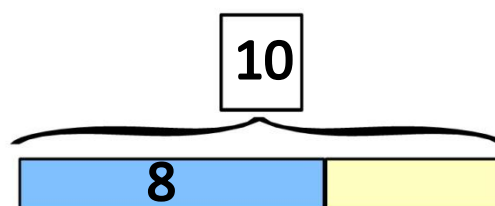
© www.basic-math-explained.com

Draw Models



© www.basic-math-explained.com

Draw Models



© www.basic-math-explained.com

Form an Addition Statement

$$\square + \square = \square$$

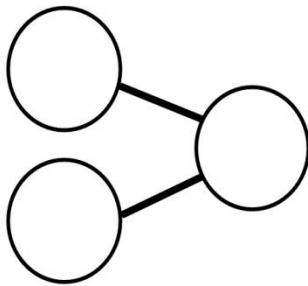
© www.basic-math-explained.com

Form an Addition Statement

$$\square + \square = \square$$

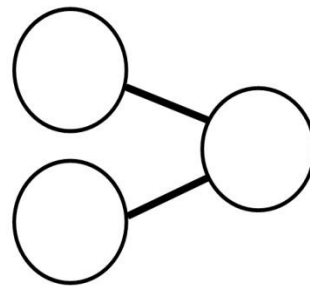
© www.basic-math-explained.com

Fill in the blanks with the correct number.



© www.basic-math-explained.com

Fill in the blanks with the correct number.



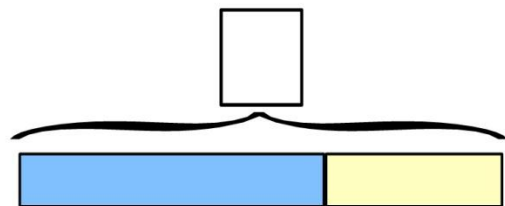
© www.basic-math-explained.com

Draw Models



© www.basic-math-explained.com

Draw Models



© www.basic-math-explained.com