

Date:


Class:

Name:

1. Write the following numbers in words.

Figures	Words
11,400	
28,018	
36,514	
40,409	

2. The expanded form of a number is shown below. What is the number? Write your answer in figures.



Answer:

3. Which of the following numbers have the greatest value?

10,010

10,101

10,001

10,110

10,100

Answer:

4.

Fill in the blanks.

a) $10,000 + 1,000 + 200 =$ _____

b) $20,000 + 1,000 + 1,000 + 100 =$ _____

c) $10,000 + 1,000 + 2,000 + 500 =$ _____

5.

Fill in the blanks.

a) In the number 46,782 the digit ____ is in the hundreds place.

b) In the number 43,065 the digit ____ is in the ten thousands place.

c) In the number 52,834 the digit ____ is in the thousands place.

6.

Fill in the blanks.

a) 4 hundreds = _____ x 100 = _____

b) 9 hundreds = _____ x 100 = _____

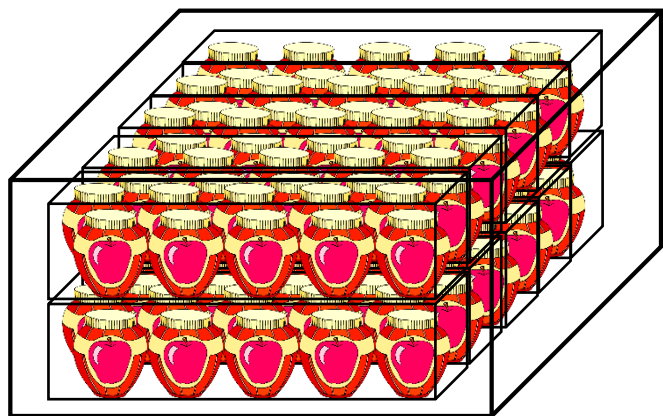
c) 10 hundreds = _____ x 100 = _____

d) 12 hundreds = _____ x 100 = _____

7. 40,000 men, women and children were at a concert. There were 1,578 more women than children. 6,314 children were at the concert. How many men were there at the concert?

Answer:

8. A factory produced bottles of jam. The bottles were packed into boxes. Each box contained 10 bottles of jam. The boxes were then put into a larger carton. There were 10 boxes in each carton. There were 250 cartons. How many bottles of jam did the factory produce?



1 carton

Answer:

9. The table shows the number of people that visited a library in 3 months. Fill in the blanks provided for the total number of visitors each month.

	January	February	March
Men	2,700	3,120	5,900
Women	5,040	4,070	7,400
Children	8,365	6,418	4,208
Total Visitors			

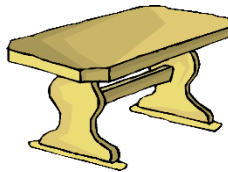
Which month had the greatest number of visitors?

Answer:

10. It is Best Sale week at a furniture store. Any item that costs \$2,000 or more get a \$150 discount. The prices of some furniture are shown below.



Chair
\$50



Dining table
\$2,500



Bed
\$3,420

I bought a bed, a dining table and 6 chairs. How much money did I spend, after the discount?

Answer: