



Date:

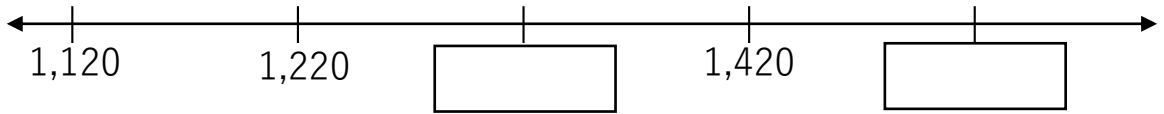
Class:

Name:

1.

a) Write this number in words: 2,471

b) Fill in the missing numbers in the number line below.



2.

Fill in the blanks.

a) In the number 3,412 the digit \_\_\_\_\_ is in the thousands place.

b) In the number 5,028 the digit 2 is in the \_\_\_\_\_ place.

c) In the number 7,308 the digit \_\_\_\_\_ is in the hundreds place.

3.

Fill in the blanks.

a)  $3478 + 1000 + 100 + 10 + 10 =$  \_\_\_\_\_

b)  $2403 + 200 + 100 + 100 =$  \_\_\_\_\_

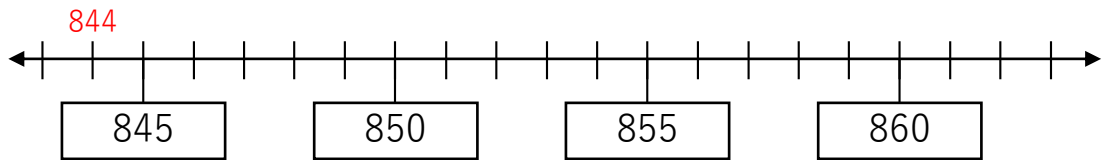
c)  $5030 + 1000 + 400 + 50 + 6 =$  \_\_\_\_\_



4.

Study these four numbers: 844, 846, 851, 854, 859

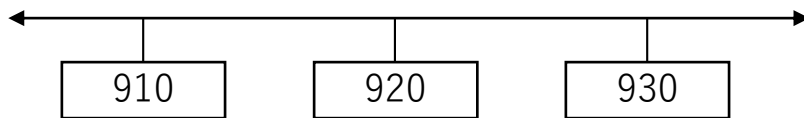
Which one of those numbers is closest to 850? Write the numbers on the number line below to help you find out.



Answer:

5.

Round off 924 to the nearest 10. Use the number line as a guide.



Answer:

6.

Arrange the numbers below in order, starting with the smallest number.

1248, 1094, 1501, 1107

Answer:

7.

I am a 4-digit number.

I am an odd number.

I am greater than 5,000 but smaller than 8,000.

My hundreds digit is smaller than my tens digit.

My ones digit is bigger than my thousands digit.

These are all my digits: 1, 7, 9, 2

What number am I?

Answer:

8.

John, Linda and Mary collected donations for charity.

John collected \$1,000 more than Mary. Linda collected \$1,500 less than











Mary. How much money did the 3 children collect altogether if Mary collected \$2,500?

Answer:

9. David has 80 more green pens than red pens at first. Then he gave away some green pens and bought 25 more red pens. In the end, he had 100 red pens and 118 green pens. How many green pens did David give away?

Answer:

10. Fill in the blank boxes with the numbers given to make each equation true. Each number can be used only once.

1	+	<input type="text"/>	+	<input type="text"/>	=	10
+		+		+		
<input type="text"/>	+	<input type="text"/>	+	<input type="text"/>	=	11
=		=		=		
7		7		7	