

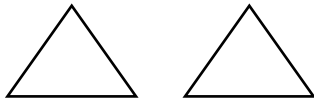
Name:

1. How many black dots are there altogether on the ladybugs? Count the number of black dots on all of the ladybugs.



There are black dots altogether.

2. There are 2 triangles below.
Draw more triangles to make 6 triangles altogether.
How many triangles did you draw?



I drew triangles.

3. The numbers below are all mixed up.


Arrange them in order from smallest number to largest number.

smallest

largest

4.

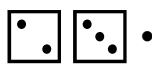
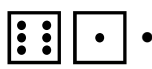
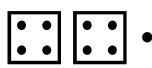
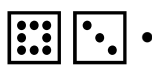
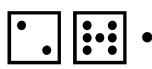
Count the stars. How many stars are there?



Answer:



5.

Count the black dots on the dice and match them to the correct number.

	• eight	•	• 7
	• eleven	•	• 9
	• nine	•	• 5
	• seven	•	• 8
	• five	•	• 11

6.

Look at the diagram below.

Muffins		<input type="text"/>
Tomatoes		<input type="text"/>

Are there more muffins or tomatoes?

Answer:

7. Fill in the missing numbers.

5	6	7							
---	---	---	--	--	--	--	--	--	--


Write the correct answers in the space provided below.

a) What number comes after 10?


b) What number comes before 8?

c) The number is between 11 and 13.

8. Count the fruits in each set of pictures. Which set has more fruits?



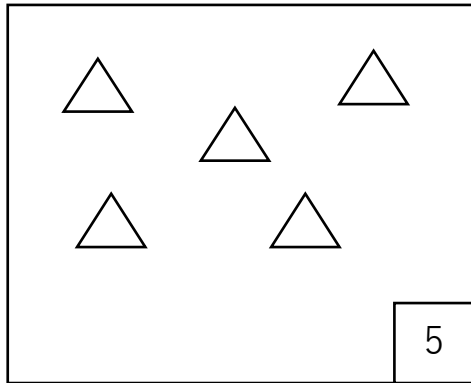
Set A



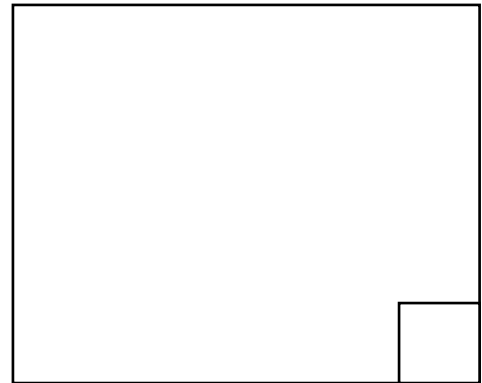
Set B

Answer:

9. There are 5 triangles in set A. Draw some triangles in set B so that there are **more triangles** in set B than in set A.



Set A

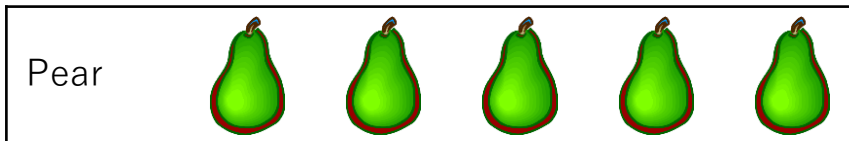


Set B

How many triangles did you draw?

Answer:

10. Count the fruits and write the number in the blanks provided.



Pear



Strawberry

Fill in the blanks:

There are pears.

There are strawberries.

There are fruits **altogether**.